


Name _____

Time to the Minute


The two hands of a clock tell the time in hours and minutes.

Use the shorter hand to read the **hours**.



See the number **5**.


Use the longer hand to read the **minutes**.
Count the minute marks, **12**.




Write the time. **5:12**

Write each time.

1.




2.




3.



4.



5.



Use the computer.

6. Click **Clock**, and watch the hands move.

How many hours pass in one complete turn of the hour hand? _____

How many minutes pass in one complete turn
of the minute hand? _____

Click **Clock** again, and check your answers.

- When you click **New Time**, the hour and minute hands will move.
Write the hours, the minutes, and the time.
- Then click **Check Time** to check your answer.
Make a ✓ if it is correct.
- Do this four times.

	Hours	Minutes	Time	Check
7.				
8.				
9.				
10.				

While the minute hand moves around the clock for 60 minutes, the hour hand moves from one hour to the next.